









NAME: _____ DATE: _____

SUGAR RUSH SUBTRACTION

Solve the problems and write the answers in the boxes as shown. Do this by crossing out the right number of minions and counting how many are left!

| | | | |
|---|--------------------------------|--|----------------------|
|  - 2 | <input type="text" value="1"/> |  - 1 | <input type="text"/> |
|  - 2 | <input type="text"/> |  - 3 | <input type="text"/> |
|  - 1 | <input type="text"/> |  - 4 | <input type="text"/> |
|  - 3 | <input type="text"/> |  - 2 | <input type="text"/> |